

Fraction - Introduction
Course questions

Name
Date

1. What represent the numbers in a fraction ?

2. How do we call the top number? The one at the bottom?

3. By which number can we never divide?

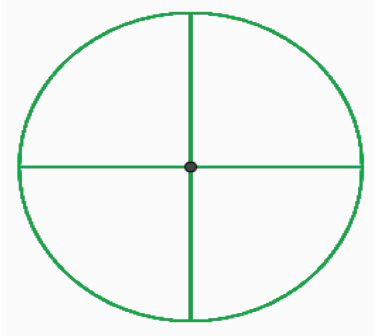
4. When is the fraction > 1 ?

5. When is the fraction < 1 ?

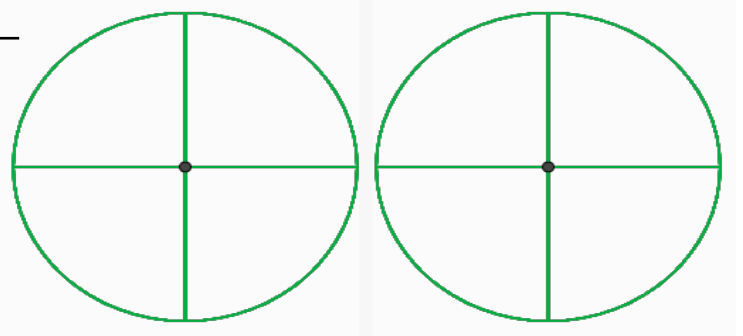
Fraction - Introduction
Visual exercices – Part I
Color the quantity

Name _____
Date _____

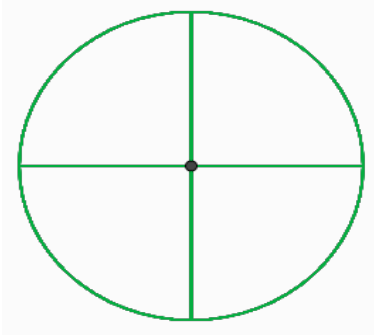
$$\frac{1}{4}$$



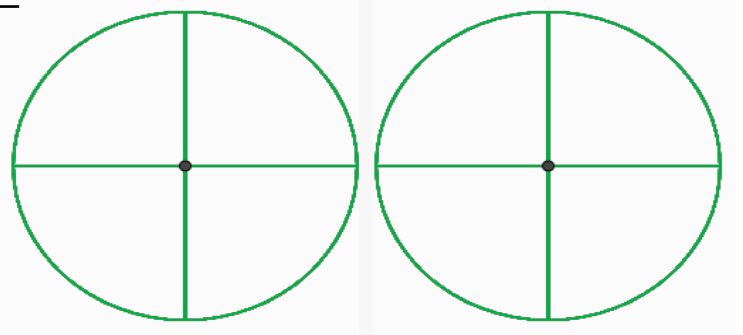
$$\frac{7}{4}$$



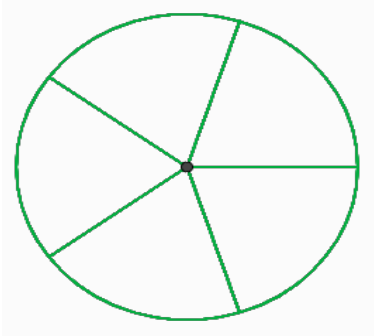
$$\frac{3}{4}$$



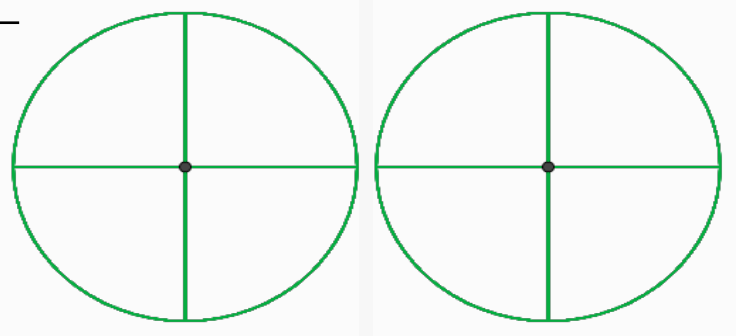
$$\frac{8}{4}$$



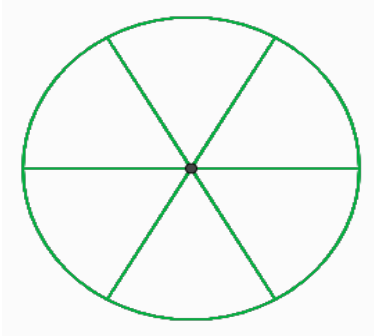
$$\frac{4}{5}$$



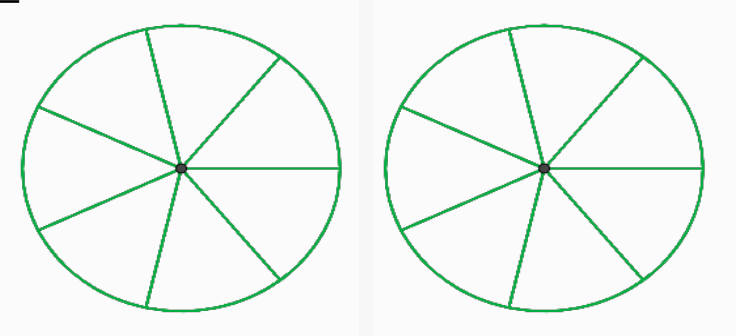
$$\frac{6}{4}$$



$$\frac{3}{6}$$



$$\frac{9}{7}$$



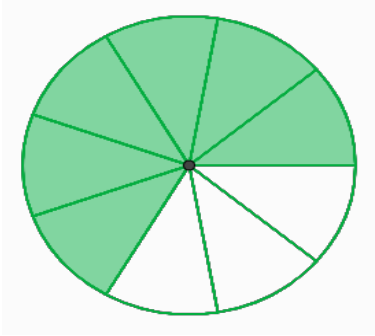
Fraction - Introduction

Visual exercises – Part II

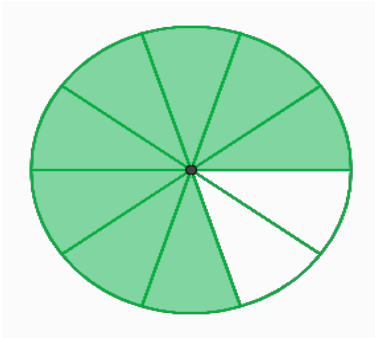
Write as a fraction

Name

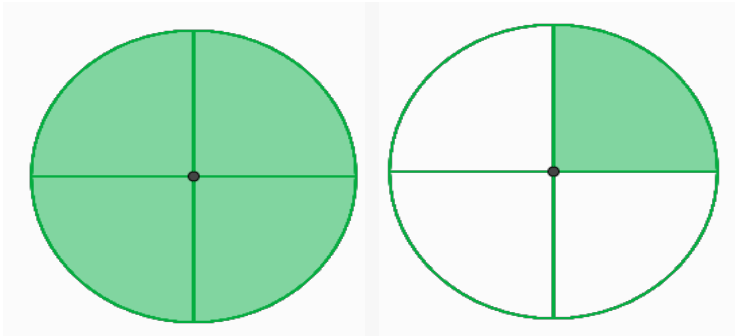
Date



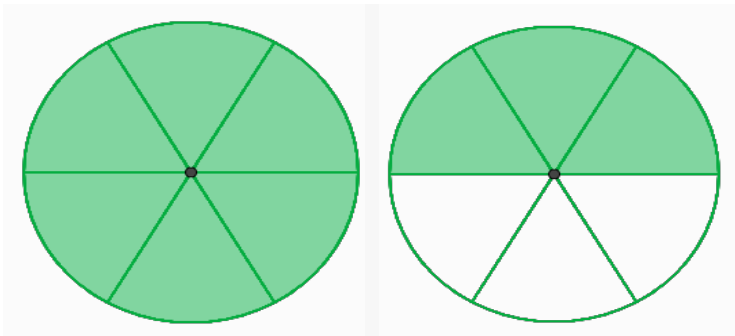
=



=



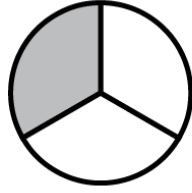
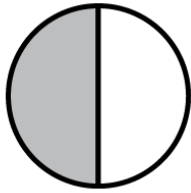
=



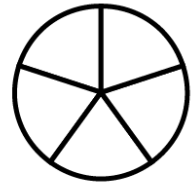
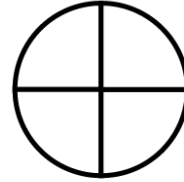
=

• **Fraction - Introduction**
 Visual exercices - Part III
 Compare the fractions

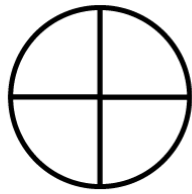
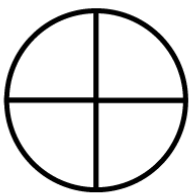
Name _____
 Date _____



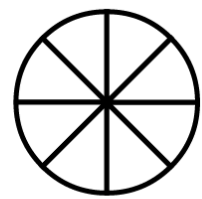
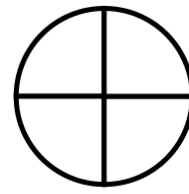
$$\frac{1}{2} > \frac{1}{3}$$



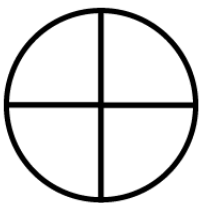
$$\frac{3}{4} \square \frac{4}{5}$$




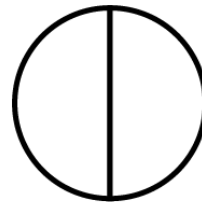
$$\frac{2}{4} \square \frac{3}{4}$$



$$\frac{2}{4} \square \frac{4}{8}$$



$$\frac{2}{4} \square \frac{2}{3}$$



$$\frac{1}{2} \square \frac{2}{4}$$

Fraction - Introduction

Visual exercices - Part IV

Write as a fraction

Name

Date

